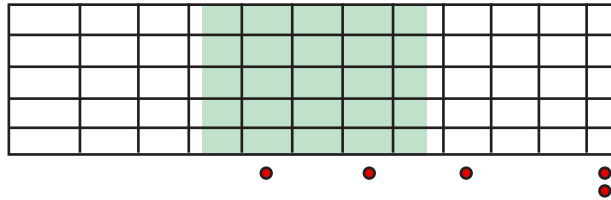


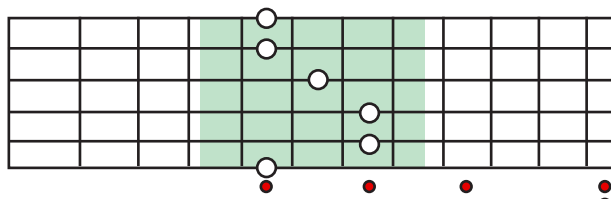
CAGED System Worksheets

Find the correct shape (C,A,G,E, or D) for the given range and key:

Question: Name the CAGED shape for the key of "A" within the shaded area:

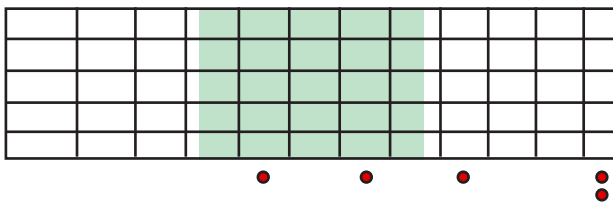


Answer:

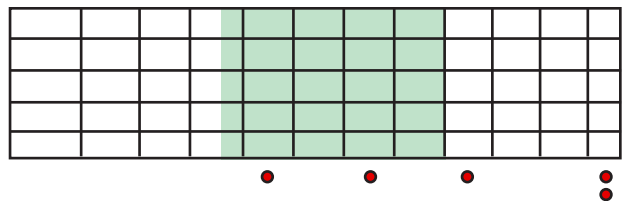


E shape

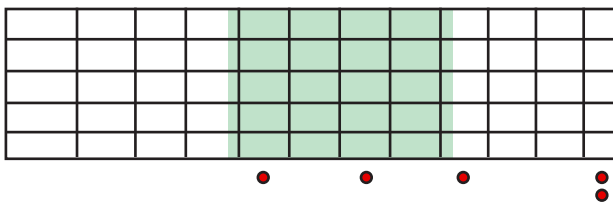
1) Key of "D"



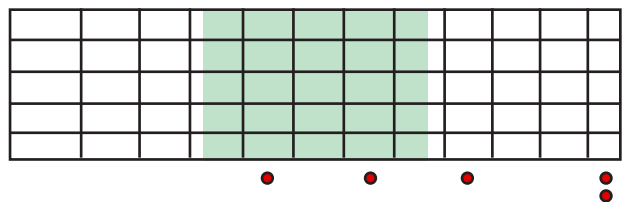
2) Key of "G"



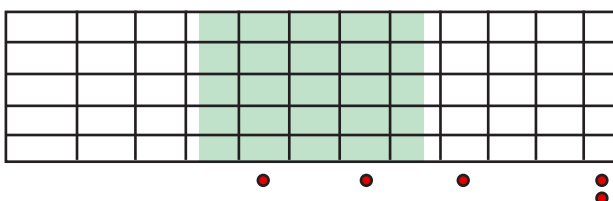
3) Key of "Bb"



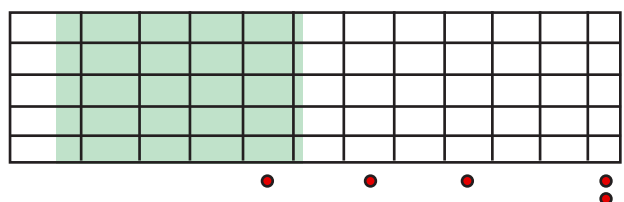
4) Key of "E"



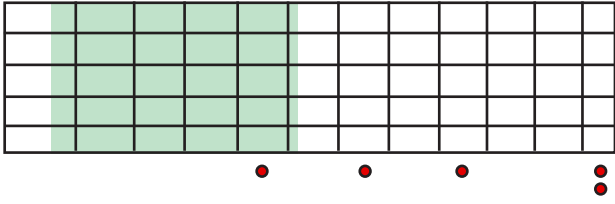
5) Key of "B"



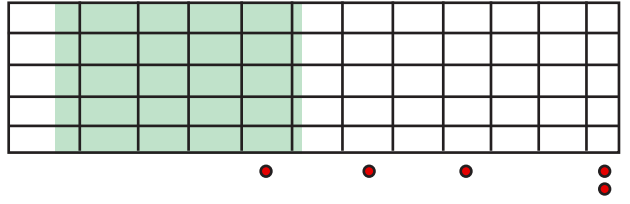
6) Key of "D"



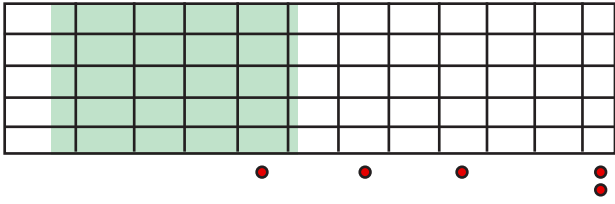
7) Key of "E"



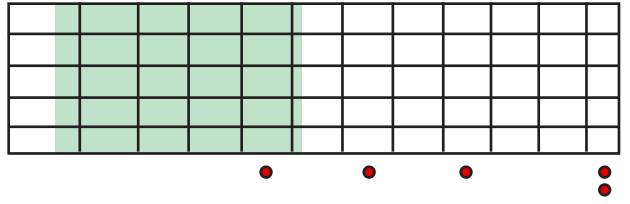
8) Key of "A"



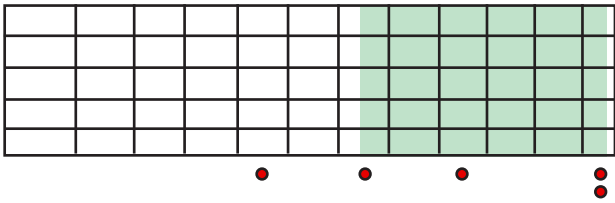
9) Key of "C"



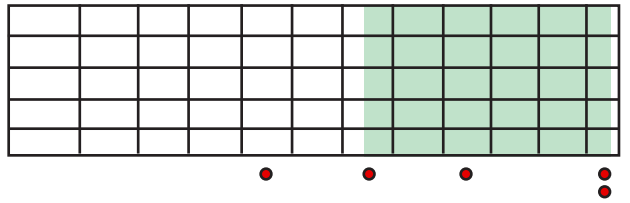
10) Key of "G"



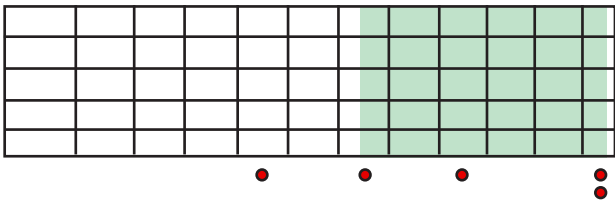
11) Key of "Bb"



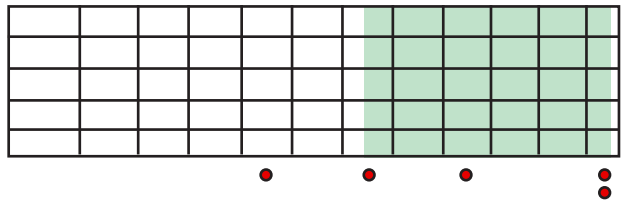
12) Key of "Eb"



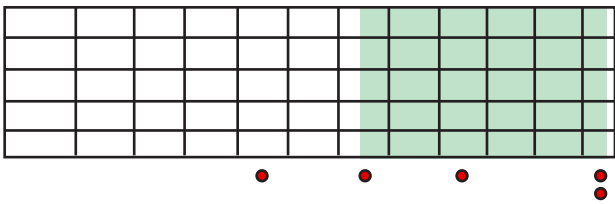
13) Key of "Ab"



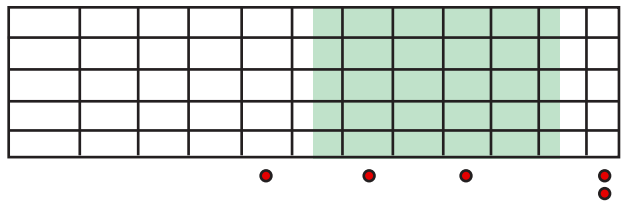
14) Key of "Db"



15) Key of "Gb"

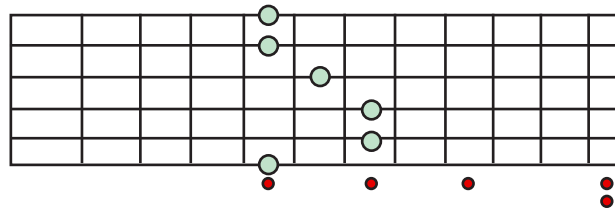


16) Key of "C"



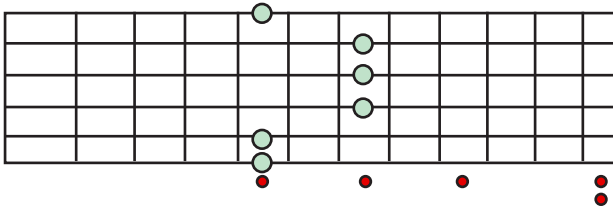
Question: What is the key given the following CAGED shape? What is the Shape?

Answer:



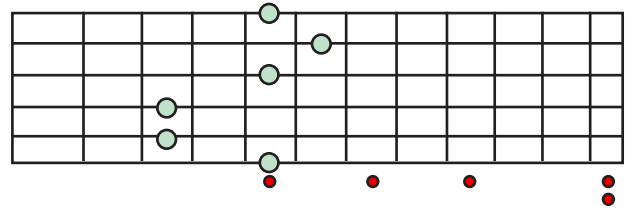
Key of "A"
E Shape

17)



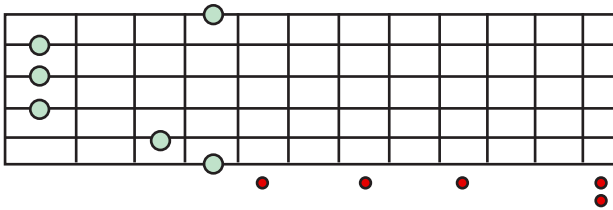
Key of _____
Shape: _____

18)



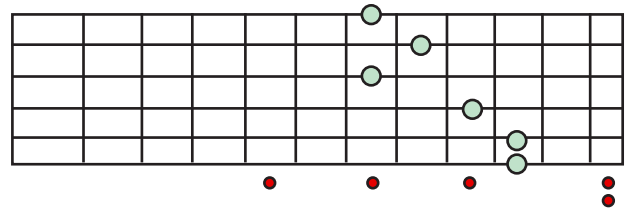
Key of _____
Shape: _____

19)



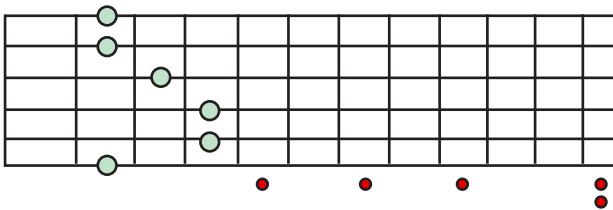
Key of _____
Shape: _____

20)



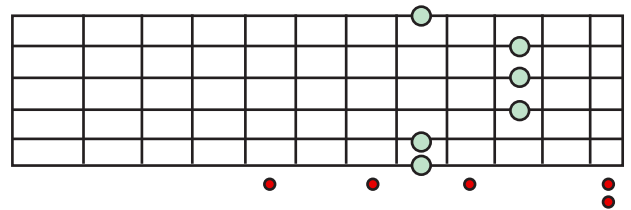
Key of _____
Shape: _____

21)



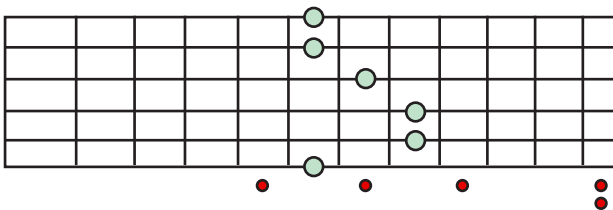
Key of _____
Shape: _____

22)



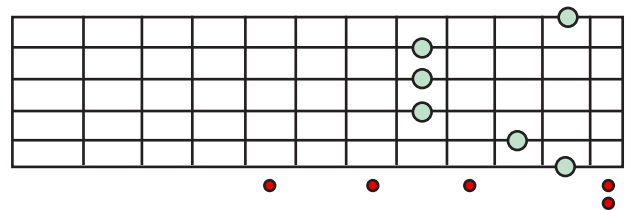
Key of _____
Shape: _____

23)



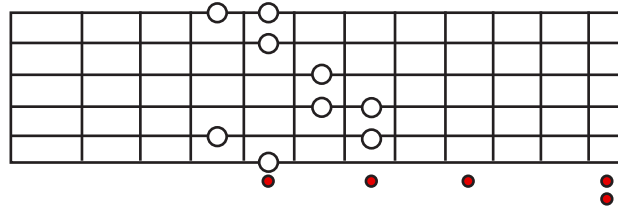
Key of _____
Shape: _____

24)

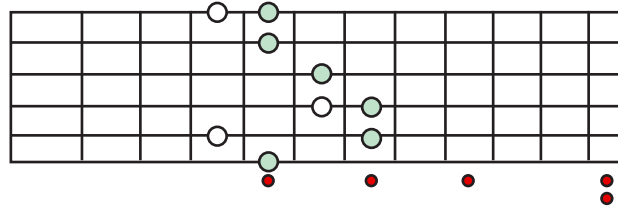


Key of _____
Shape: _____

Question: What CAGED shape is “hidden” within the following scale / arpeggio? What key is it in?

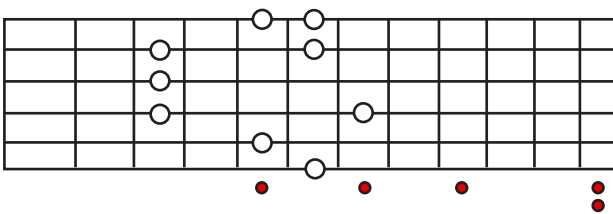


Answer:



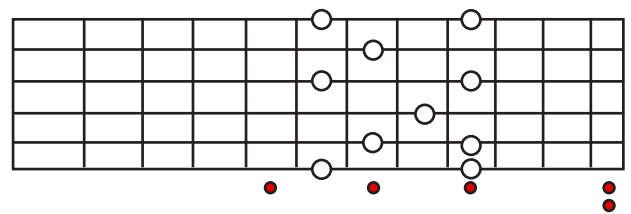
E Shape
Key of “A”

25)



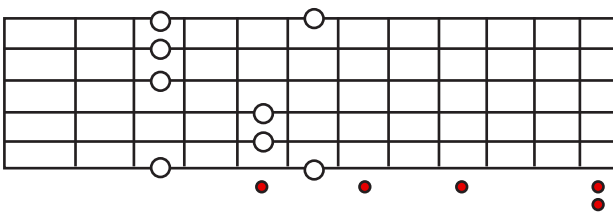
Shape: _____
Key of _____

26)



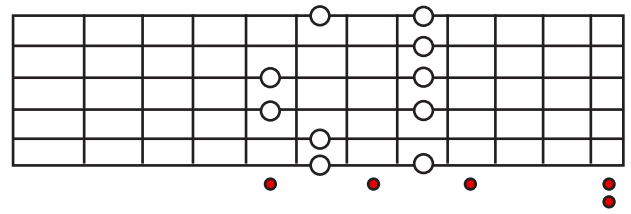
Shape: _____
Key of _____

27)



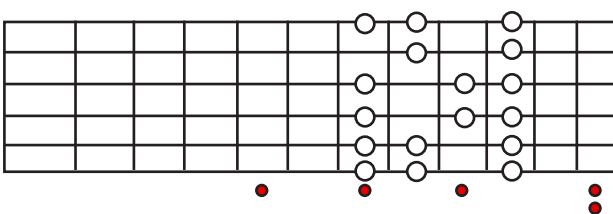
Shape: _____
Key of _____

28)



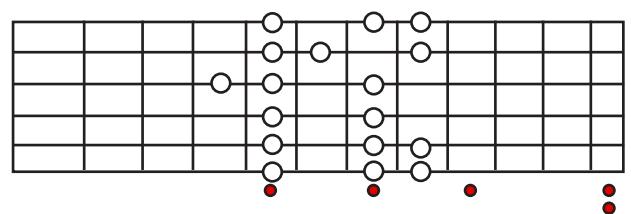
Shape: _____
Key of _____

29) (Hint: This is a Major scale)



Shape: _____
Key of _____

30) (Hint: This is a Major scale)



Shape: _____
Key of _____

Answers!

(Hey no peeking)

1. A Shape
2. D Shape
3. E Shape
4. C Shape
5. G Shape
6. C Shape
7. D Shape
8. G Shape
9. A Shape
10. E Shape
11. D Shape
12. G Shape
13. C Shape
14. E Shape
15. A Shape
16. E Shape
17. Key of D, A Shape
18. Key of F, D Shape
19. Key of Ab, G Shape
20. Key of G, C Shape
21. Key of Gb, E Shape
22. Key of F, A Shape
23. Key of Bb, E Shape
24. Key of Eb, G Shape
25. G Shape, Key of Bb
26. C Shape, Key of Gb
27. E Shape, Key of G minor
28. D Shape, Key of Eb
29. E Shape, Key of C
30. G Shape, Key of C